

# TRAFFIC LAWS

WRITE THE "LETTER" OF THE CORRECT ANSWER ON YOUR PAPER.

90. This sign indicates:



- A. Slow down for a reverse turn ahead
- B. Watch for side road traffic to the right
- C. Get ready to cross or enter a one-way street to the right

91. This sign indicates:



- A. Go straight ahead if you are in left lane
- B. Turn left from left lane only
- C. Turn left from either lane

92. This sign indicates:



- A. The road ahead curves to the left
- B. You should never pass another car here
- C. The center lane is used for left turns only

93. This sign indicates:



- A. Slow down for a left and right turn
- B. Slow down for a left and right curve
- C. Slow down for a right curve

94. This sign indicates:



- A. Slow down for a right and left curve
- B. Slow down for a right curve
- C. Slow down for a right and left turn

95. This sign indicates:



- A. Look for detour, road closes
- B. Slow down for winding road
- C. Slow down for very dangerous intersection

96. This sign indicates:



- A. Watch mostly to the left for other traffic
- B. Watch mostly to the right for other traffic
- C. Watch right and left for other traffic

97. This sign indicates:



- A. Watch for side road traffic to the right
- B. Slow down for a right turn
- C. Drive to the right

# TRAFFIC LAWS

WRITE THE "LETTER" OF THE CORRECT ANSWER ON YOUR PAPER.

98. This sign indicates:



- A. Slow down for a low place in the roadway
- B. Slow down for a dip
- C. Slow down for a sharp rise in the roadway

99. This sign indicates:



- A. Sound your horn to warn pedestrians
- B. Slow down as you are near a school
- C. You are near a church
- D. Disregard in summer

100. This sign indicates:



- A. Be sure to stay well in your lane because the bridge ahead has room for only two lanes of traffic
- B. Stop and wait for oncoming cars to cross first
- C. Speed up to beat other cars across
- D. You are approaching a 4-lane road

101. This sign indicates:



- A. Get ready to detour
- B. Speed up to normal as you are at the end of a paving project
- C. Watch for a drop from the pavement edge to the shoulder
- D. You are approaching an uneven road surface

102. This sign indicates:



- A. Be extra careful not to run off of the pavement
- B. Drive on the shoulders when meeting wide trucks
- C. Watch for soft spots in the roadway

103. This sign indicates:



- A. Expect a change in the road surface
- B. Get ready to detour
- C. Speed up to normal as you are at the end of a paving project

104. This sign indicates:



- A. Detour
- B. Stop until you are waved on
- C. Watch for a construction or maintenance project ahead

# TRAFFIC LAWS

WRITE THE "LETTER" OF THE CORRECT ANSWER ON YOUR PAPER.

105. This sign indicates:



- A. Look for another route as only trucks may use the route ahead
- B. Look out for a train at a railroad track crossing ahead
- C. Watch for trucks entering or crossing the highway ahead

106. This sign indicates:



- A. Know that Texas Highway 235 runs right and left ahead
- B. Know that US Highway 235 runs straight ahead
- C. Know that it is 235 miles to the Texas boundary line



107. This sign indicates:



- A. Know that Texas Highway 235 continues straight ahead
- B. Know that it is 235 miles to Texas City
- C. Know that Texas Highway 235 runs both right and left ahead

108. This sign indicates:



- A. Get ready to turn as you cannot enter the next street the way you are going
- B. Get ready to enter a two-way street
- C. Get ready to cross a two-way street

109. This sign indicates:



- A. Slow down for a double curve
- B. Slow down for a winding road
- C. Slow down for a left and right turn

110. This sign indicates:



- A. Slow down for a right and left turn
- B. Slow down for a left and right curve
- C. Slow down for a right curve

111. This sign indicates:



- A. Stop before crossing the intersection
- B. Watch right and left for cross traffic
- C. Turn around as the road "dead ends" ahead

# TRAFFIC LAWS


WRITE THE "LETTER" OF THE CORRECT ANSWER ON YOUR PAPER.

112. This sign indicates:



- A. Drive no faster than 25 miles per hour for the turn ahead
- B. Drive in the left lane if you are going over 25 miles per hour
- C. Know that the highest safe speed for the curve ahead is 25 miles per hour in this zone
- D. Slow down to at least 25 miles per hour for the turn ahead

113. This sign indicates



- A. Return to normal highway speed after passing
- B. Slow down for men working ahead
- C. Get ready to turn right or left as you are approaching the end of the road that is open

114. This sign indicates:



- A. Exit to right for Highway No. 35
- B. Slow to 35 miles per hour to exit expressway
- C. Maintain a speed of at least 35 miles per hour on the expressway

115. This sign indicates:



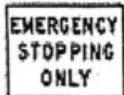
- A. If driving locally, go around the sign
- B. Look for a detour or turn around and go back
- C. Have your driver's license ready to be checked

116. This sign indicates:



- A. Look out for gravel trucks
- B. Look out for cattle running loose
- C. Do not apply brakes suddenly or make sharp turns

117. This sign indicates:



- A. Stop only in an emergency, such as vehicle failure
- B. Continue on - stopping is not permitted
- C. Stop here if you are tired and wish to rest

118. This sign indicates:



- A. Slow down for aside road traffic to the right
- B. Slow down for a turn to the right
- C. Slow down for a curve to the right

# TRAFFIC LAWS

WRITE THE "LETTER" OF THE CORRECT ANSWER ON YOUR PAPER.

105. This sign indicates:



- A. Look for another route as only trucks may use the route ahead
- B. Look out for a train at a railroad track crossing ahead
- C. Watch for trucks entering or crossing the highway ahead

106. This sign indicates:



- A. Know that Texas Highway 235 runs right and left ahead
- B. Know that US Highway 235 runs straight ahead
- C. Know that it is 235 miles to the Texas boundary line

107. This sign indicates:



- A. Know that Texas Highway 235 continues straight ahead
- B. Know that it is 235 miles to Texas City
- C. Know that Texas Highway 235 runs both right and left ahead

108. This sign indicates:



- A. Get ready to turn as you cannot enter the next street the way you are going
- B. Get ready to enter a two-way street
- C. Get ready to cross a two-way street

109. This sign indicates:



- A. Slow down for a double curve
- B. Slow down for a winding road
- C. Slow down for a left and right turn

110. This sign indicates:



- A. Slow down for a right and left turn
- B. Slow down for a left and right curve
- C. Slow down for a right curve

111. This sign indicates:



- A. Stop before crossing the intersection
- B. Watch right and left for cross traffic
- C. Turn around as the road "dead ends" ahead

# TRAFFIC LAWS


WRITE THE "LETTER" OF THE CORRECT ANSWER ON YOUR PAPER.

112. This sign indicates:



- A. Drive no faster than 25 miles per hour for the turn ahead
- B. Drive in the left lane if you are going over 25 miles per hour
- C. Know that the highest safe speed for the curve ahead is 25 miles per hour in this zone
- D. Slow down to at least 25 miles per hour for the turn ahead

113. This sign indicates



- A. Return to normal highway speed after passing
- B. Slow down for men working ahead
- C. Get ready to turn right or left as you are approaching the end of the road that is open

114. This sign indicates:



- A. Exit to right for Highway No. 35
- B. Slow to 35 miles per hour to exit expressway
- C. Maintain a speed of at least 35 miles per hour on the expressway

115. This sign indicates:



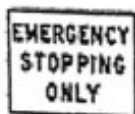
- A. If driving locally, go around the sign
- B. Look for a detour or turn around and go back
- C. Have your driver's license ready to be checked

116. This sign indicates:



- A. Look out for gravel trucks
- B. Look out for cattle running loose
- C. Do not apply brakes suddenly or make sharp turns

117. This sign indicates:



- A. Stop only in an emergency, such as vehicle failure
- B. Continue on - stopping is not permitted
- C. Stop here if you are tired and wish to rest

118. This sign indicates:



- A. Slow down for aside road traffic to the right
- B. Slow down for a turn to the right
- C. Slow down for a curve to the right

# TRAFFIC LAWS

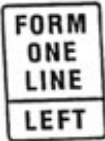
WRITE THE "LETTER" OF THE CORRECT ANSWER ON YOUR PAPER.

119. This sign indicates:



- A. Prepare to reduce speed for a downgrade
- B. Watch for water trucks
- C. Trucks are not permitted in this area

120. This sign indicates:



- A. Stop and wait for signal from workman
- B. Prepare to merge into only one lane of traffic
- C. Disregard if driving in left lane

121. This sign indicates:



- A. Watch out for crossroad traffic
- B. Watch for a stop sign
- C. Get ready to enter a main highway

122. This sign indicates:



- A. Slow down for a dip in an intersection
- B. Slow down for a "T" intersection
- C. Slow down for a "Y" intersection

123. This sign indicates:



- A. Detour to the right
- B. If driving slow take the route to the right
- C. Watch for side road traffic to the right

124. This sign indicates:



- A. Get ready to turn right or left
- B. Enter the street ahead slowly
- C. Stop before entering the street ahead

125. This sign indicates:



- A. Get ready to enter a one-way street
- B. Follow a temporary route to the right or around the main road
- C. Stay on the main highway if you can
- D. Stop and ask for information

# TRAFFIC LAWS

WRITE THE "LETTER" OF THE CORRECT ANSWER ON YOUR PAPER.

126. This sign indicates:



- A. Slow down for end of the pavement
- B. Stay on the right-hand side of the road and watch approaching traffic
- C. Watch for a dangerous intersection

127. This sign indicates:



- A. Slow down for a sharp bend in the road ahead
- B. Slow down for a roadside barbershop
- C. Be careful not to sideswipe a solid object which this sign marks

128. This sign indicates:



- A. Watch for very dangerous crossing
- B. Watch for highway machinery
- C. Slow down for 1,000 feet of road repairs

129. This sign indicates:



- A. Slow down for a left and right turn
- B. Slow down for a left and right curve
- C. Slow down for a right curve

130. This sign indicates:



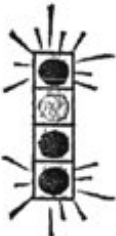
- A. Know that you are driving at an altitude of 270 feet
- B. Understand that you are on a road which circles off and returns to Highway 270
- C. Understand that you are on a short state highway in a city or urban area

131. This sign indicates:



- A. Keep in the right-hand lane when driving slow
- B. Overtake to the right if driving slow
- C. Drive only in the right-hand lane

132. This signal indicates:



- A. All traffic must turn
- B. Stop before turning left
- C. Left turn permitted, on green arrow, as approaching traffic is directed to stop



# TRAFFIC LAWS

WRITE THE "LETTER" OF THE CORRECT ANSWER ON YOUR PAPER.

133. This sign indicates:



- A. Slow down for a reverse curve
- B. Slow down for a winding road
- C. Slow down for a double turn

134. This sign indicates:



- A. Detour
- B. Go straight or turn right
- C. Turn either right or left ahead
- D. Always drive only in the right-hand lane here

135. A posted speed limit of 55 mph means:



- A. Drive at least 55 miles per hour
- B. Drive 55 miles per hour in the daytime only
- C. Disregard this sign in the daytime as it is for nighttime only
- D. Drive no faster than 55 miles per hour day or night

136. A flashing red signal light means:

- A. Stop until the green light comes on
- B. Slow down
- C. Detour *lol lets explore*
- D. Stop, look, and yield before proceeding



137. A flashing yellow signal light means:

- A. Do not turn
- B. Slow down if other traffic is near
- C. Stop
- D. Always slow down



138. This sign indicates:



- A. Be sure your load is not higher than 12 ft. 6 in. and will go under a bridge or underpass ahead
- B. Be sure your load is not longer than 12 ft. 6 in.
- C. Be sure your load is not wider than 12 ft. 6 in.

139. This sign indicates:



- A. Disregard as this sign is for the construction workers
- B. Watch for machinery and workers
- C. Look for a detourman

# TRAFFIC LAWS

WRITE THE "LETTER" OF THE CORRECT ANSWER ON YOUR PAPER.

140. This sign indicates



- A. Slow down for a low place in the road
- B. Dim or dip your lights
- C. Slow down for a hill

141. When approaching a green traffic light you should:



- A. Watch mainly to the left
- B. Look both ways as you go ahead carefully
- C. Speed up to avoid holding up traffic
- D. Watch mainly to the right

142. This sign indicates:



- A. Watch for railroad ahead
- B. You are approaching a one-way road
- C. Stay well in your lane since the pavement ahead narrows

143. This sign indicates:



- A. Pedestrians are not permitted to cross in this area
- B. You should slow down, watch for people crossing the street on foot
- C. You are near an intersection

144. This sign indicates:



- A. Always stop completely
- B. Slow down very quickly
- C. Stop only when other traffic is close
- D. Slow down, shift to second, look right and left

145. This sign indicates:



- A. Watch for a hazard in or near the roadway
- B. Disregard if you cannot read the sign
- C. Always look for a curve ahead of this shape sign

146. This sign indicates:



- A. Slow down – a hazardous condition may exist on bridge
- B. Continue as you are – sign is displayed regardless of condition
- C. Speed up and hurry across the bridge

# TRAFFIC LAWS

WRITE THE "LETTER" OF THE CORRECT ANSWER ON YOUR PAPER.

147. This sign indicates:



- A. Never pass another vehicle at this location
- B. Pass only if you are in a hurry
- C. Cross the double stripe and return quickly when overtaking here

148. This sign indicates:



- A. Get ready to cross a rural road
- B. Always stop
- C. Look out for a train

149. This sign indicates:



- A. You may turn left after a complete stop
- B. You should move over into the right lane if you are driving slow
- C. Left turns are prohibited at this intersection - Do not turn left

150. This sign indicates:



- A. Slow down for a right turn
- B. Look for a detour to the right
- C. Slow down for a right curve

151. This sign indicates:



- A. Expect other traffic to yield to you
- B. Always stop
- C. Yield to other traffic

152. This sign indicates:



- A. Drive around this area
- B. Watch for children
- C. Always sound your horn
- D. Drive in low gear

153. This sign indicates:



- A. Always watch for trains
- B. Stop
- C. Pay no attention to the sign if it cannot be read

154. This sign indicates:



- A. Look out for a train
- B. Disregard if you cannot read sign
- C. Always stop, look, and listen